

Maximum Marks : 200

- This question paper booklet contains FOUR sections. Each includes 50 questions.
- Section "A" Language.
- Section 'B' Mathematics.
- Section "C" General Knowledge.
- Section 'D" Intelligence.
- In all, the paper consists of 200 questions for a total of 200 marks. Answer all questions.

1) Choose the answer that tells whether the capitalized noun is used as a subject, direct object, or predicate:
MS.PILZER made her way through the crowded halls.

a) Subject b) Direct object
c) Object d) Predicate noun

I was feeling so stressed that I ate an entire box of cookies . [1]

c) Uncountable d) Collective

The hottest temperature in the nation today was recorded in FLORIDA. [1]

c) Abstract noun d) Common noun

a) Name b) Yaho!
c) Is d) My

The climate of the city _____ mild and pleasant most of the time. [1]

c) Remains d) Was remaining

The baby was weeping in the room. [1]

d) Past Perfect Continuous

I to park. [1]

d) Did not go

Look! the sun _____. [1]

d) Was rising

d) Has rained

happily, happily, happilie, happyli [1]

b) Happily

d) Happyli

[1]

b) Supposedly

d) Usually

friends / auxiliaries / animals / necessary / are our / and
/ survival / for our [1]

b) Our Animals are friends, auxiliaries and necessary for our survival.

c) Animals are our friends, and auxiliaries necessary for our survival.

d) Animals are our friends, auxiliaries and necessary for our survival.

make our life / good friends / happy / extremely [1]

b) Good friends make our life happy extremely.

c) Extremely happy make our life good friends.

d) Make our life happy good friends extremely.

to make / wants / these / days / quick / money [1]

a) Everyone wants to make these days quick money.

b) Wants everyone to make quick money these days.

c) Everyone wants make to quick money these days.

d) Everyone wants to make quick money these days.

Koalas / hardly / are / drink / animals / that / water [1]

a) Koalas are hardly animals that water drink.

b) Koalas are animals that hardly drink water.

c) Hardly Koalas are animals that drink water.

d) Animals are Koalas that hardly drink water.

Vitamins _____ under protective food. [1]

b) Comes

d) Come

- 17) Choose the proper tense or form of the verb given in brackets:

I shall go there after I _____ my lessons. (do) [1]

- a) Do b) Have done
c) Am doing d) Did

- 18) Choose the correct option for tense:

He _____ me whenever he wants. [1]

- a) Calls b) Called
c) Calling d) Call

- 19) Choose the appropriate tense:

I _____ tennis every Sunday morning. [1]

- a) Playing b) Am play
c) Play d) Am playing

- 20) Choose the appropriate synonym: Tired [1]

- a) Sick b) Hopeful
c) Sleepy d) Energetic

- 21) Select the word that conveys the similar meaning as the word given in capital letters:

MYSTICAL [1]

- a) Prophetic b) Spiritually symbolic
c) Imaginary d) Vague

- 22) Select the word that conveys the similar meaning as the word given in capital letters:

COPIOUS [1]

- a) Heavy b) Abundant
c) Broad d) Liberal

- 23) To kill two birds with one stone. (idiom) [1]

- a) One stone is enough to kill the two birds
b) To kill birds
c) To kill the birds with a stone
d) To solve two problems at once

- 24) The officer took him to the task. (idiom or proverb) [1]

- a) Rebuked him b) Praised him
c) Promoted him d) Dismissed him

- 25) The meaning of the proverb "A bird in the hand is worth two in the bush" is: [1]

- a) Be grateful for whatever you have.
b) One bird in hand becomes three.
c) A bird in the hand will call the other two birds.
d) A bird in the hand becomes two.

- 26) Everyone focused on the whale by the boat. Which word is a synonym for focused? [1]

- a) Discourage b) Concentrated
c) Outlined d) Pictured

- 27) Find out the synonyms of **Chorus**. [1]

- a) Order b) Singing group
c) Refrain d) Singing group

- 28) If you can't find your book, you can borrow _____. [1]

- a) Me b) Mine
c) My d) Myself

- 29) Choose the correct pronoun:

India is proud of _____ great, rich culture. [1]

- a) Itself b) Him
c) Their d) Its

- 30) Which is the subjective pronoun in the sentence?

She is as intelligent as I. [1]

- a) As b) She
c) I d) Is

- 31) Choose the correct article/s for the below sentence:

_____ Andamans are situated in the Bay of Bengal while

_____ Sicily is a beautiful island. [1]

- a) The, the
b) The, no article
c) No article, no article
d) The, a

- 32) Choose the appropriate article:

_____ students of this class are very punctual. [1]

- a) The b) An
c) No article required d) A

- 33) Choose the correct article for the given sentence:

We are going to _____ cinema. [1]

- a) No article b) A
c) An d) The

- 34) Choose the appropriate adjective:

I ate _____ apple. [1]

- a) That b) The
c) One d) Some

- 35) Choose the correct adjective in the given sentence:

More people are running in triathlons than ever before.

[1]

- a) More b) People
c) Triathlons d) Running, ever

- 36) Which of the following is a possessive adjective? [1]

- a) Hers b) Her's
c) She d) Her

- 37) Choose the correct adjective for the given sentence:

This is a _____ question. [1]

- a) Difficult b) More difficult
c) Most difficult d) Easy

- 38) The cat is hiding _____ the curtains. [1]

- a) Behind b) Over
c) Above d) Under

- 39) He shows great ability _____ Mathematics. [1]

- a) About b) For
c) At d) In

- 40) The workers went on strike because their demands were not fulfilled. Choose the meaning of the underlined preposition. [1]

- a) By means of
b) Touching the surface of
c) A condition
d) About

Question No. 41 to 45 are based on the given text. Read the text carefully and answer the questions:

To visit a tiger in the wild is an unforgettable experience. It can be put on top of the list of the wonders of the world. Gaurav and a few friends visited Jim Corbett National Park. They waited for the overnight train from Old Delhi station to Ram Nagar. From there it was rough road for three hours to the remote environmentally green jungle camp on the banks of the river Kosi. In the buffer zone of the Jim Corbett National Park. This lies in the north of India, in the state of Uttarakhand. Jim Corbett National Park is the oldest national park in India. The park is named after the hunter and conservationist Jim Corbett, who played a key role in its establishment. The park was established in 1936 and was originally known as Hailey National Park.

- 41) Why did the narrator visit the wilds on the bank of river Kosi? [1]
- To have the experience of spending a night in the jungle.
 - To see a tiger in its original habitation.
 - To survey the jungle and write a report.
 - To experience the encounter with a tiger.
- 42) Jim Corbett National Park is located in _____. [1]
- South India
 - Kosi
 - Ram Nagar
 - Uttarakhand
- 43) The National Park was named in the honour of _____. [1]
- Hunters
 - Environmentalists
 - Jim Corbett
 - Mr. Hailey
- 44) What is the speciality of the National Park? [1]
- It was established by Jim Corbett.
 - It was named after Jim Corbett.
 - It is the first and oldest National Park of India.
 - It was established in 1936.
- 45) Which word/expression used in the passage means **Most important**? [1]
- Remote
 - Rough
 - Key role
 - Bank of Kosi

Question No. 46 to 50 are based on the given text. Read the text carefully and answer the questions:

A story tells that two friends were walking through the desert. During some point of the journey they had an argument, and one friend slapped the other one in the face. The one who got slapped was hurt, but without saying anything, wrote in the sand:

"TODAY MY BEST FRIEND SLAPPED ME IN THE FACE." They kept on walking until they found an oasis, where they decided to take a bath. The one who had been slapped got stuck in the mire and started drowning, but the friend saved him. After the friend recovered from the near drowning, he wrote on a stone: "TODAY MY BEST FRIEND SAVED MY LIFE." The friend who had slapped and saved his best friend asked him, "After I hurt you, you wrote in the sand, and now, you write on a stone. Why?"

The other friend replied: "When someone hurts us, we should write it down in sand where winds of forgiveness can erase it away. But, when someone does something good for us, we must engrave it in stone where no wind can ever erase it."

- 46) What does writing on the stone suggest?
- Writing something on stone means expressing one's love for another
 - Writing on stone means writing something with an intention to make it last forever
 - Writing something on stone means expressing one's extreme anger
 - Writing something on stone means writing something with a view to preaching one and all
- [1]
- Option (i)
 - Option (ii)
 - Option (iii)
 - Option (iv)
- 47) What is the synonym of the word **engrave** as used in the passage? [1]
- Dislodge
 - Neglect
 - Inscribe
 - Aid
- 48) Why did the friend who got hurt write on the sand?

- Because he was very kind - hearted
- Because he was too weak to take revenge
- Because he knew that his feeling of hurt was temporary
- Because he loved his friend too much

[1]

- Option (iii)
- Option (i)
- Option (iv)
- Option (ii)

- 49) What is an oasis? [1]

- An oasis is a tall tree found in a desert
- An oasis is a creature like centipede
- An oasis is grassland
- An oasis is a water body found in a desert

- 50) What did one of the friends do after recovering from the near drowning?

- He rebuked his friend
- He avenged by slapping his friend in his face
- He wrote something on sand in his praise
- He wrote something about his friend to express his gratitude

[1]

- Option (ii)
- Option (i)
- Option (iv)
- Option (iii)

Section B - Mathematics

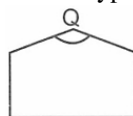
- 51) The Indo - Arabic numeral for LXXV is: [1]

- 125
- 750
- 525
- 75

- 52) Convert : 1400 [1]

- M
- MC
- MD
- MCD

- 53) Which type of angle best describes angle Q?



[1]

- Obtuse
- Straight
- Acute
- Right

- 54) Two angles of a triangle are 30° and 60° . What type of triangle it would be? [1]

- Isosceles triangle
- Scalene triangle
- Right angle triangle
- Equilateral triangle

- 55) In a right - angled triangle, one of the acute angles measures 35° , find the measures of the other acute angle.

[1]

- 55°
- 65°
- 45°
- 70°

- 56) How many of the given figures have perpendicular lines?



[1]

- 2
- 3
- 4
- 1


- 57) 180° angle is called _____. [1]

- Straight angle
- Obtuse angle
- Right angle
- Acute angle

- 58) The angles between North and West and South and East are: [1]

- Complementary
- Supplementary
- Both are obtuse
- Both are acute

- a) 60 b) 600
c) 6 d) 6000
- 85) In a morning walk, three persons step off together. Their steps measure 80 cm, 85 cm, and 90 cm respectively. What is the minimum distance each should walk so that all can cover the same distance in complete steps? [1]
a) 5 cm b) 15 cm
c) 10 cm d) 12240 cm
- 86) The difference between the LCM and HCF of the numbers 30, 36 and 90 is [1]
a) 186 b) 354
c) 174 d) 366
- 87) Find the least number which is exactly divisible by 4, 6 and 8 each. [1]
a) 34 b) 24
c) 12 d) 112
- 88) If there are 400 students. Each child is to be given 1 orange, 1 banana and 5 biscuits. How many oranges, biscuits and bananas are distributed? [1]
a) 400 oranges, 400 banana and 400 biscuits.
b) 4000 oranges, 400 banana and 2000 biscuits.
c) 400 oranges, 400 banana and 2000 biscuits.
d) 400 oranges, 400 banana and 200 biscuits.
- 89) Which of the following set of numbers is divisible by 8 but not divisible by 12? [1]
a) 24, 48, 72 b) 96, 192, 288
c) 8, 16, 24 d) 12, 24, 36
- 90) Which is a mixed fraction from the following - [1]
a) $\frac{17}{18}$ b) $4\frac{2}{3}$
c) $\frac{7}{18}$ d) 3
- 91) Hariya Wants to weigh some fruits in his weighing balance. What weight of fruits should be added to balance the scale.



- [1]
a) 700g b) 400g
c) 600g d) 500g
- 92) What temperature is shown on the thermometer?
-
- [1]
a) 66 degree b) 70 degree
c) 68 degree d) 69 degree
- 93) Convert the given temperature from degree Celsius to degree Fahrenheit.
 $30^{\circ}\text{C} = \text{ }^{\circ}\text{F}$ [1]

- a) 65°F b) 78°F
c) 75°F d) 86°F
- 94) If 1 metre: 100 centimetre :: then 1 kilometre: ? [1]
a) 1000 metre b) 100 centimetre
c) 100 metre d) 1000 centimetre
- 95) $\frac{3}{4} \times \frac{2}{5}$ [1]
a) < b) &
c) = d) >
- 96) Read the statements carefully and choose the correct option.
Statement A: $62 = \text{LXXII}$
Statement B: $62 = \text{LXII}$ [1]
a) Both are correct. b) B is correct.
c) A is correct. d) Both are incorrect.
- 97) The HCF of two numbers is 88 and their LCM is 98154. If one of the number is 1558. The other number is [1]
a) 4932 b) 2384
c) 2394 d) 1197
- 98) In a race of 1 km, A defeats B by 36 m or 18 s. How much time (in sec) did A take to complete the full distance? [1]
a) 582 b) 460
c) 482 d) 500
- 99) The simple interest on ₹200 for 7 months at 5 paise per rupee per month is [1]
a) ₹30.50 b) ₹70
c) ₹35 d) ₹7
- 100) There are 3450 employees in an organisation. Out of which 42% got promoted. How many such employees are there who got promoted? [1]
a) 1587 b) 1518
c) 1656 d) 1449

Section C - General Knowledge

- 101) The national song of India **Vande Mataram** was sung for the first time on which political occasion? [1]
a) 1906 INC session b) 1911 INC session
c) 1896 INC session d) 1891 INC session
- 102) The national anthem of India was sung for the first time in which session of the Indian National Congress and in which year? [1]
a) Lucknow, 1899 b) Nagpur, 1920
c) Calcutta, 1911 d) Amritsar, 1919
- 103) Lord Buddha was born in [1]
a) Patliputra b) Bodh Gaya
c) Vaishali d) Lumbini
- 104) Which among the following is the largest religious community in India? [1]
a) Muslims b) Sikhs
c) Hindus d) Christians
- 105) In which of the following styles of dance is the story/theme always taken from Mahabharata and Ramayana? [1]
a) Kuchipudi b) Odissi
c) Mohiniattam d) Bharatanatyam
- 106) Which sweet is deep - fried, dipped in sugar syrup, round shaped usually orange in colour? [1]
a) Gajar ka halwa b) Bhakarwadi
c) Rasgulla d) Jalebi

- 120) The _____ cover the tongue and react to chemicals in food. [1]
a) Teeth
b) Sphincters
c) Skin
d) Taste Buds
- 121) Which of these food types is the main cause of high cholesterol in body? [1]
a) Food with high fats
b) Food with high carbohydrates
c) Food with high protein
d) Food with high vitamins
- 122) _____ is an example of steamed food. [1]
a) Sandwich
b) Cookies
c) Kebabs
d) Idli
- 123) Who is the father of Indian Cinema? [1]
a) Raj Kapoor
b) Bal Thakeray
c) Prithviraj Kapoor
d) Dada Sahib Phalke
- 124) Who was honoured with the first Jnanpith Award? [1]
a) G. Sankara Kurup
b) Lal Bahadur Shastri
c) Mihir Sen
d) Gautam Kaji
- 125) _____ river is called the **Sorrow of Bengal**. [1]
a) Son
b) Hooghly
c) Damodar
d) Ganga
- 126) Which among the following is a point from where the earthquake originates deep inside the ground? [1]
a) Focus
b) Both Epicentre and Focus
c) Epicentre
d) Sea
- 127) Which of the following is a traditional Rainwater harvesting system of Jodhpur district in Rajasthan? [1]
a) Virdas
b) Johads
c) Nadi
d) Ahar - pyne
- 128) How much of the Earth's surface is covered with water? [1]
a) Two - third
b) Two fourth
c) One - third
d) One - fourth
- 129) Which among the following books describes the love of Krishna for Radha, written by Jayadev? [1]
a) Geet Govind
b) Guide
c) Godan
d) Gaban
- 130) The longest play of William Shakespeare is _____. [1]
a) Romeo and Juliet
b) Othello
c) Hamlet
d) Julius Caesar
- 131) Which monument is the world's tallest brick minaret? [1]
a) Iron pillar
b) Alai Minar
c) Char Minar
d) Qutub Minar
- 132) Who among the following was the architect of Humayun's Tomb? [1]
a) George Wittet
b) Mirak Mirza Ghiyas
c) Yaqut of Dabul
d) Ustad Khalil
- 133) Which among the following countries is the largest producer of natural gas in the world? [1]
a) Russia
b) United states
c) China
d) Iron
- 134) Which country is the largest oil producer in the world? [1]
a) Russia
b) Kuwait
c) USA
d) Saudi Arabia

- 135) Sahyadris is also known as? [1]
 a) Western Ghats b) Aravali
 c) Eastern Ghats d) Himadri
- 136) The people of Kashmir wear a long woolen gown called: [1]
 a) Angram b) Achkan
 c) Bugtar d) Phiran
- 137) Who invented electric bulb? [1]
 a) Thomas Alva Edison
 b) C.V. Raman
 c) Marie Curie
 d) Alexander Graham Bell
- 138) Who made the first antibiotic? [1]
 a) Hedy Lamarr b) Benjamin Franklin
 c) Boroplus d) Alexander Fleming
- 139) Which day of the year is celebrated as **Children's Day**? [1]
 a) 5 September b) 4 January
 c) 2 October d) 14 November
- 140) Purna Swaraj means [1]
 a) Non - cooperation
 b) Civil disobedience
 c) Complete Independence
 d) Boycott
- 141) Whose birth anniversary is celebrated as National Youth Day in India? [1]
 a) Swami Vivekanand b) Rajiv Gandhi
 c) Bhagat Singh d) Lal Bahadur Shastri
- 142) The book, Satyarth Prakash was written by: [1]
 a) Swami Dayanand Saraswati
 b) Swami Vivekanand
 c) Ramakrishna Paramahansa
 d) Swami Prabhavananda
- 143) Who was the first Indian to go into space? [1]
 a) Kalpana Chawla b) Ravish Malhotra
 c) Vikram Sarabhai d) Rakesh Sharma
- 144) Who was the first prime minister of India? [1]
 a) Narendra Modi b) Rajiv Gandhi
 c) Jawaharlal Nehru d) Indira Gandhi
- 145) Who can make laws on subjects included in the union list? [1]
 a) Supreme Court b) State
 c) All of these d) Parliament
- 146) The members of the Lok Sabha are directly elected by the people of India for a period of: [1]
 a) 7 years b) 6 years
 c) 3 years d) 5 years
- 147) How many members are there in the Rajya sabha? [1]
 a) 272 b) 312
 c) 344 d) 250
- 148) Who is the Agriculture Minister of India? [1]
 a) Arjun Munda b) Narendra Singh Tomar
 c) Kiren Rijiju d) Harsimrat Kaur
- 149) India's first railway university has been opened in _____. [1]
 a) Punjab b) Uttar Pradesh
 c) Gujarat d) Maharashtra

- 150) When was Bangladesh formed? [1]
 a) In 1905 b) In 1971
 c) In 1970 d) In 1947

Section D - Intelligence

- 151) Identify the correct set which can take place the missing set.
 $s z o r p m : y r n q l o :: ? : e a i m v q$ [1]
 a) B f j n r w b) P f m o s t
 c) B c h j o r d) C x l m t u
- 152) Identify the correct number which can take place the missing number.
 $4^{10} : 5^{11} :: 5^{11} : ?$ [1]
 a) 6^{12} b) 6^{10}
 c) 7^{11} d) 7^{10}
- 153) Number in each pair is connected in the same way. Identify the missing number.
 $263 : 36 :: 139 : ?$ [1]
 a) 48 b) 63
 c) 27 d) 36
- 154) Identify the correct number which can take place the missing number.
 $\frac{3}{7} : \frac{14}{6} :: \frac{5}{2} : ?$ [1]
 a) $\frac{1}{4}$ b) 5
 c) $\frac{3}{5}$ d) $\frac{4}{10}$
- 155) If **125** is to **9**, then **387** is to _____. [1]
 a) 10 b) 8
 c) 17 d) 19
- 156) Choose which number completes the second pair in the same way as the first pair.
MO : 1315 :: HJ : ? [1]
 a) 810 b) 1816
 c) 1917 d) 1618
- 157) Choose the set of letters that completes the incomplete pair in the same way as the complete pair.
PARK : TDTL :: GROUND : ? [1]
 a) MWSXPE b) NXTWQF
 c) HQPTOC d) LVRWOD
- 158) If **ZORPIA** is to **AZIOPR**, then **TROUPE** is to _____. [1]
 a) EUROPE b) REPORT
 c) ETPRUO d) PETROL
- 159) Choose the set of numbers out of the four options, which is similar to the given set.
(14, 23, 31) [1]
 a) (15, 19, 24) b) (13, 21, 29)
 c) (12, 21, 30) d) (15, 23, 31)
- 160) Identify the correct number which can take place the missing number.
 $0.23 : 0.0023 :: 8 : ?$ [1]
 a) 0.008 b) 0.8
 c) 0.08 d) 800
- 161) There is a certain relationship between the pair of letters on the either side of ::. Establish the relationship of the left pair and find the missing term.
MTR : PRT :: ? : XIJ [1]
 a) ULI b) VKG
 c) UKH d) VKH
- 162) There is a certain relationship between the pair of figures given on either side of : ::. Identify the relationship of the first pair and find the missing term of the second

pair.

ADE: FGJ :: KNO :? [1]

- a) TPR b) RQP
c) PQR d) PQT

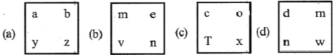
163) Select the odd one out.



[1]

- a) Figure (C) b) Figure (D)
c) Figure (B) d) Figure (A)

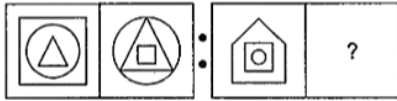
164) Select the figure which is different from others.



[1]

- a) Figure (c) b) Figure (b)
c) Figure (a) d) Figure (d)

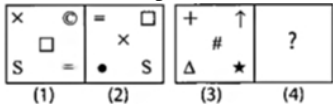
165) Select the figure that shows the similar relationship.



[1]

- a)
b)
c)
d)

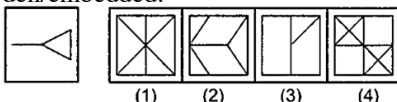
166) There is a certain relationship between figures (1) and (2). Establish the similar relationship between figures (3) and (4) by selecting a suitable figure from the options which will replace the (?) in Fig. (4).



[1]

- a)
b)
c)
d)

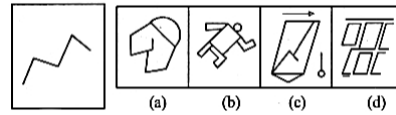
167) Select the figure in which the question figure is hidden/embedded.



[1]

- a) Figure (1) b) Figure (3)
c) Figure (2) d) Figure (4)

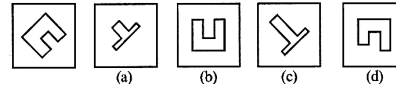
168) Select the figure in which the question figure is hidden/embedded.



[1]

- a) Figure (c) b) Figure (d)
c) Figure (a) d) Figure (b)

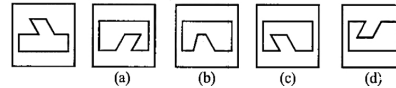
169) Find the figure that completes the geometrical figure.



[1]

- a) Figure (2) b) Figure (4)
c) Figure (3) d) Figure (1)

170) Find the figure that completes the geometrical figure.



[1]

- a) Figure (3) b) Figure (2)
c) Figure (4) d) Figure (1)

171) Observe the figure given below and answer the following question.



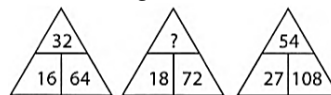
_____ is third to the left of W. [1]

- a) V b) U
c) T d) S

172) 25 people are standing in a row at a form collection centre. Jack is 19th from the counter. Three people ahead of Jack walk away without depositing their form. What is the position of Jack from the end? [1]

- a) 12th b) 5th
c) 10th d) 7th

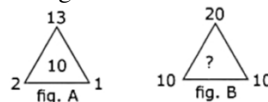
173) Find the missing number, if same rule is followed in all the three figures.



[1]

- a) 90 b) 36
c) 42 d) 54

174) Study the pattern (in fig. A) and fill the missing number in fig. B:



[1]

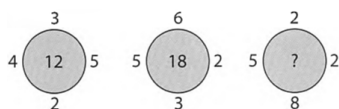
- a) 1 b) 3
c) 2 d) 0

175) How many such 4's are there in the following sequence of numbers, each of which is immediately preceded by a prime number and immediately followed by an odd number?

9 2 4 4 5 4 7 4 2 9 8 7 4 7 3 4 5 2 1 4 1 3 4 4 8
4 7 3 3 9 1 1 4 2 1 [1]

- a) 2 b) 3
c) 5 d) 4

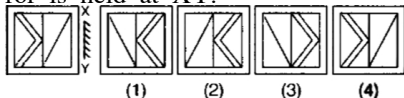
176) Identify the rule of the pattern and find the missing term which will replace the question mark.



[1]

- a) 16 b) 14
c) 12 d) 18

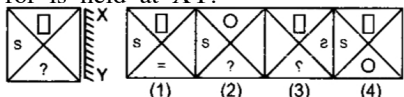
- 177) Select the mirror image of the question figure when mirror is held at XY.



[1]

- a) Figure (4) b) Figure (2)
c) Figure (1) d) Figure (3)

- 178) Select the mirror image of the question figure when mirror is held at XY.



[1]

- a) Figure (1) b) Figure (3)
c) Figure (4) d) Figure (2)

- 179) 2, 3, 8, 27, 112, ? [1]

- a) 226 b) 339
c) 452 d) 565

- 180) A series is given with one term missing. Choose the correct alternative from the given ones that will complete the series.

3, 4, 12, 48, ? [1]

- a) 467 b) 576
c) 426 d) 512

- 181) Choose the word which is different from the rest.

Crane, Flamingo, Cuckoo, Curlew [1]

- a) Cuckoo b) Crane
c) Curlew d) Flamingo

- 182) Choose the word which is different from the rest.

Inch, Foot, Yard, Quart [1]

- a) Quart b) Foot
c) Inch d) Yard

- 183) Choose the word which is different from the rest.

Wages, Honorarium, Pocket money, Salary [1]

- a) Pocket money b) Wages
c) Honorarium d) Salary

- 184) Choose the word which is different from the rest.

V.V. Giri, General Zia, General Ershad, Lal Bahadur Shastri [1]

- a) General Ershad b) Lal Bahadur Shastri
c) General Zia d) V.V. Giri

- 185) If **Grandfather** is called **Maternal uncle**, **Maternal uncle** is called **Grandmother** and **Grandmother** is called **Maternal grandmother**; then what is the brother of mother is called? [1]

- a) Maternal grandmother b) Grandmother
c) Maternal uncle d) Grandfather

- 186) In a certain code language, if **SISTER** is written as **THTSFQ**, then how will **MOTHER** be written in that language? [1]

- a) NNUGFQ b) ONUGFQ
c) NOUIFQ d) OPUIFS

- 187) Find the meaningful combination of numbers so that let-

ters are arranged accordingly to form a meaningful word.

Q	A	U	S	R	E
1	2	3	4	5	6

[1]

- a) 4, 1, 3, 2, 5, 6 b) 1, 2, 3, 4, 5, 6
c) 3, 1, 4, 2, 5, 6 d) 3, 4, 1, 5, 2, 6

- 188) If in a certain code, WATCH is coded as HCTAW, then how will CORNER be coded in the same code? [1]

- a) RENORC b) CORERN
c) RNECOR d) RENROC

- 189) The code for some letters are shown below.

Letters	A	R	C	E	D	I	M	T	L
Codes	3	9	7	2	4	5	1	0	8

Find the code for CREDIT. [1]

- a) 279540 b) 792450
c) 792540 d) 729405

- 190) In this question some letters are given which are numbered 1,2,3,4,5 and 6 followed by four options containing combinations of these numbers. Find the combination of numbers so that letters are arranged accordingly to form a meaningful word.

R	F	W	E	L	O
1	2	3	4	5	6

[1]

- a) 2, 5, 6, 3, 1, 4 b) 2, 5, 6, 3, 4, 1
c) 2, 5, 6, 4, 3, 1 d) 2, 5, 6, 1, 3, 4

- 191) In a certain code language, the letters are coded as shown here.

Letters	E	L	D	M	N	X	Y	P
Codes	7	©	5	\$	1	*	8	?

Find the code of LONELY. [1]

- a) ©2*7©5 b) ©815©?
c) ©217©8 d) \$215\$©

- 192) In a certain code language SAFEST is coded as & # @ £ & * and FOREST is coded as @ \$ © £ & *. How will SOFTER be coded in that language? [1]

- a) * £ © ? \$ @ b) & @ £ * © #
c) & \$ @ * £ © d) & \$ @ © £ *

- 193) One morning after sunrise Nivedita and Niharika were talking to each other face to face at Dalphin crossing. If Niharika's shadow was exactly to the right of Nivedita, Which direction Niharika was facing? [1]

- a) West b) North
c) South d) East

- 194) In the given clock, if the minute hand rotates 270° anti-clockwise, then in which direction will it point?



[1]

- a) West b) South - East
c) East d) North - West

- 195) Vikas said - **This girl is the wife of the grandson of my**

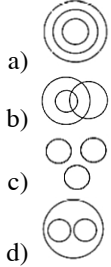
mother. How is Vikas related to the girl? [1]

- a) Husband b) Father
c) Father - in - law d) Brother


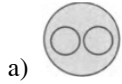
196) Pointing to a lady, Shohbit said, "her granddaughter is the only daughter of my brother." How is the lady related to Shohbit? [1]

- a) Daughter b) Mother
c) Sister d) Grandmother

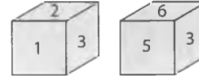
197) Which of the following diagrams indicates the best relation amongst Mercury, Zinc and Metal? [1]



198) Which of the following diagrams indicates the best relation amongst the India, Delhi and Japan? [1]



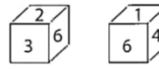
199) Two positions of a dice are shown below. Which digit will appear on the face opposite to the face with number 4?



[1]

- a) 6 b) 5
c) 2 d) 3

200) Two positions of a dice are shown here. Which number will be on the face opposite to the face having number 5?



[1]

- a) 1 b) 6
c) 3 d) 2